




CLASS 1 SAMPLE PAPER 1

SECTION-01 LOGICAL REASONING

1. Find the next figures in the figure pattern given below.



Ans. [D]

2. Complete the number pattern.






Ans [C]


3. In the questions given below, the series with one or more terms figures are missing marked with ‘?’. Choose the correct option to replace the ‘?’ mark(s).



- [A] 19 [B] 18
[C] 17 [D] 20

Ans [C]

4. Number of the groups of 9 paper clips () shown here is



- [A] 2 [B] 3
[C] 9 [D] 27

Ans [D]

5. How many bananas are kept outside the basket?

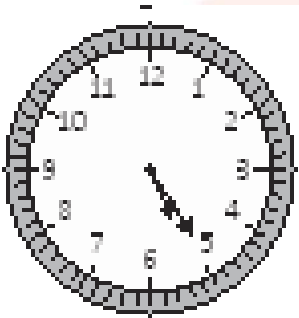


- [A] 1 [B] 2
[C] 3 [D] 4

Ans [D]

SECTION-02 MATHEMATICS

6. A programme of children ended at the time shown on the clock. At what time did the programme end?



- [A] 6: 00 [B] 5: 20
[C] 7: 00 [D] None of these

Ans [B]

7. Suresh had 112 bookmarks. He gives some bookmarks to her pupils, he had 13 bookmarks left. How many bookmarks did he give away?

- [A] 110 [B] 125
[C] 99 [D] 130

Ans [C]

8. Count and write the amount of money.





- [A] Rs 70.00 [B] Rs 76.01
 [C] Rs 75.40 [D] Rs 80.04

Ans [B]

9. Six cats are numbered as follows:



Which cat shows the number lying between 40 and 50 and also having 3 at ones place?

- [A]  [B] 



[C]



[D]

Ans [B]

10. Sonia bought 45 candies. She gave 22 cookies to her sister.
How many candies are left with her?

[A] 42

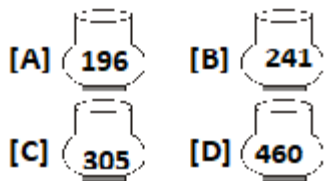
[B] 23

[C] 50

[D] 43

Ans [B]

11. Which of the following is greatest?



Ans [D]

12. Write '+' or '-' in each \bigcirc to complete the number sentence.

$$149 \bigcirc 30 = 302 \bigcirc 123$$

[A] +, +

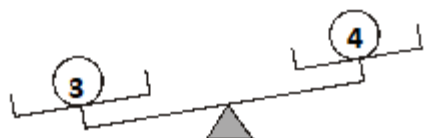
[B] +, -

[C] -, -

[D] -, +

Ans [B]

13.



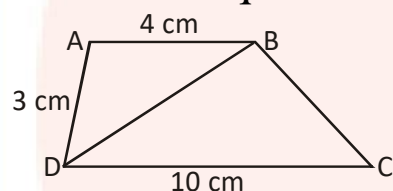
Object _____ is the heaviest.

[A] 3 [B] 5

[C] 4 [D] 1

Ans [C]

Direction (Q.No.14 & 15): Study the diagram below and answer the questions 14 and 15.



14. The length of BD is 1 cm less than the total length of AB and AD.

CD is _____ cm longer than BD.

[A] 5 [B] 4

[C] 8 [D] 9

Ans [B]




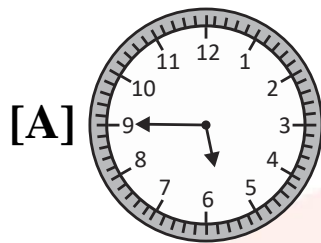
15. The length of CD is twice that of BC. What is the length of all the sides of triangle BCD?

[A] 15 cm [B] 31 cm

[C] 42 cm [D] 38 cm

Ans [A]

16. Which of the following clocks shows 30 minutes after 4 O'clock?



Ans [B]

17. Sent gold High School has 453 students. It has 23 more students than kiddy gold High School. How many students does kiddy gold High School have?

[A] 400 [B] 430

[C] 403 [D] 340

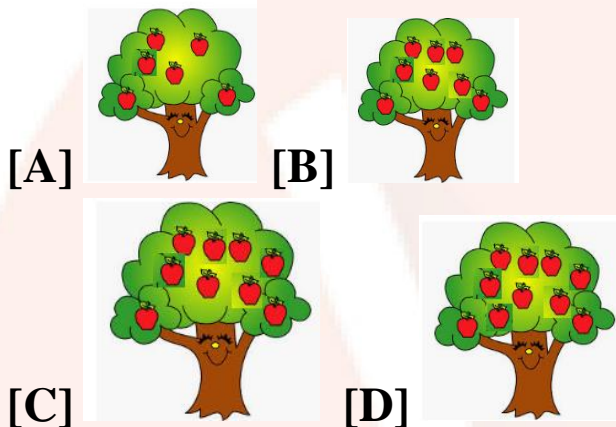
Ans [B]

18. Tanshu spent Rs 35.70 on a ball and Rs 50.30 on a toy car.
How much did he spend altogether?

- [A] Rs 80 [B] Rs 85
[C] Rs 58 [D] Rs 86

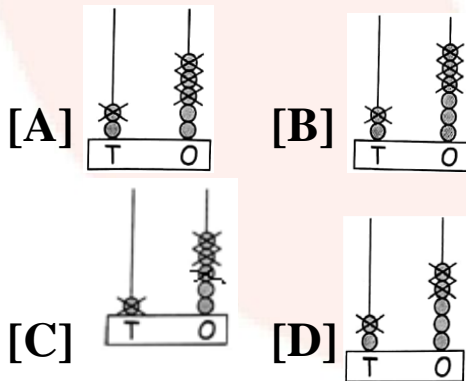
Ans [D]

19. Which tree has apples more than 6 but less than 9?



Ans [B]

20. Which abacus shows $15 - 13 = 13$?



Ans [C]

21. Which of the following is smallest?

- [A] 589 [B] 654
[C] 162 [D] 876

Ans [C]

22. 6 hundreds 3 tens 2 ones – 3 hundreds 2 tens 6 ones =

- _____.
[A] 306 [B] 360
[C] 603 [D] 305

Ans [A]

23. $17 - \text{glass} = 8$

$\text{glass} + \text{mug} + \text{glass} = 22$

What does  stand for ?

- [A] 7 [B] 5
[C] 3 [D] 4

Ans [D]

24. A number bond is shown below.


What is the value of $M \times N$?




- [A] 35 [B] 43
[C] 52 [D] 25

Ans [D]

25. Tanya has following two pencils.



1  = 1 unit

Find the total length of both the pencils.

[A] 7 units [B] 6 units

[C] 5 units [D] 9 units

Ans [D]

26. There were 298 hens and cows on a farm.

There were 153 hens.

How many cows were there?

[A] 138 [B] 140

[C] 145 [D] 144

Ans [C]

27. Write the correct time for the clock shown below.




[A] 5 : 15 [B] 5 : 40

[C] 6 : 20 [D] 3 : 20

Ans [A]

28. Sumit has following flowers and balloons.



Which statement is true?

- [A] Flowers are more than balloons.
- [B] Flowers are equal to balloons.
- [C] Flowers are less than balloons
- [D] Balloons are 2 more than flowers.

Ans [C]

29. A bag of rice weighs 3 kg. How much do 6 bags of rice weight?

- [A] 18 kg [B] 24 kg
- [C] 15 kg [D] 17 kg

Ans [A]

30. If only all Saturdays and Sundays are holidays, then in the month of December 2014 how many holidays will we get?

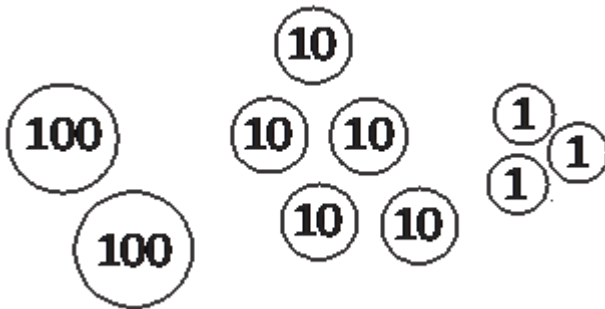
December 2014						
Sun	Mon	Tue	Wed	Thu	Fri	Sat
	1	2	3	4	5	6
7	8	9	10	11	12	13
14	15	16	17	18	19	20
21	22	23	24	25	26	27
28	29	30	31			

- [A] 6 [B] 8
- [C] 10 [D] 7

Ans [B]

ACHIEVER SECTION

31. How much do the counters add up to?



[A] 253


[B] 235

[C] 325

[D] 532

Ans [A]

32. The packet of rice has a mass of _____ kg.



- [A] 9 [B] 15
[C] 18 [D] 12

Ans [D]

33. Fill in the blank:

The book is _____ the lamp.



- [A] Equal to [B] Lighter than
[C] Heavier than [D] None of these

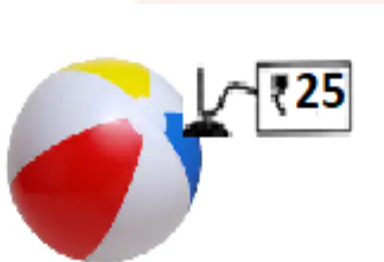
Ans [B]

34. Which of the following is the CORRECT way of writing 8 less than 14?

- [A] $14 - 8 = 6$ [B] $14 + 8 = 6$
[C] $14 - 6 = 8$ [D] $14 + 6 = 8$

Ans [A]

35. Tonu gave Rs 50 to buy this ball. How much money will he get back?



- [A] Rs 15 [B] Rs 25
[C] Rs 20 [D] Rs 17

Ans [B]

